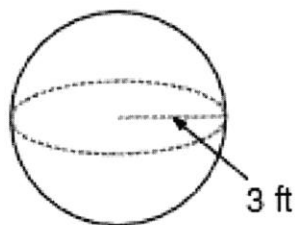
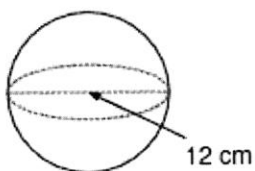


Find the surface area and volume for each of the following

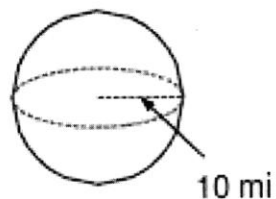
1.



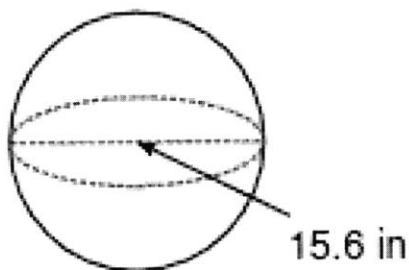
2.



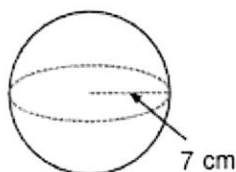
3.



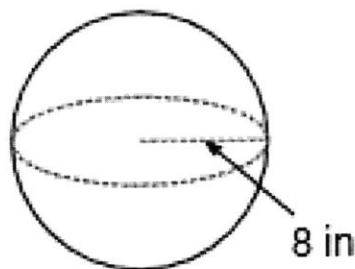
4.



5.



6.



7. The volume of a sphere is \_\_\_\_\_, what is the radius of the sphere?

8. The surface area of a sphere is \_\_\_\_\_. What is the radius of the sphere?

9. The radius of Planet X is 50 mi. If 25% of the planet surface is covered with alien slime. How many square miles of alien slime is there?