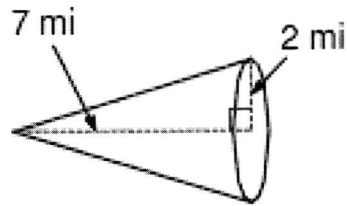


1. A cone has a radius of 4 cm, a height of 3 cm, and a slant height of 5 cm.
What is the surface area?

What is the volume?

#3



Base Area:

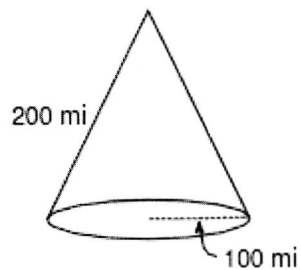
Base Circumference

Lateral Area

Surface Area

Volume

#5



Base Area:

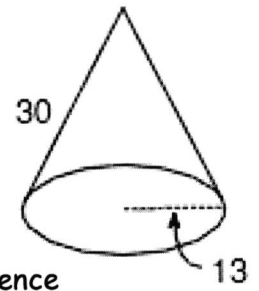
Base Circumference

Lateral Area

Surface Area

Volume

#4



Base Area:

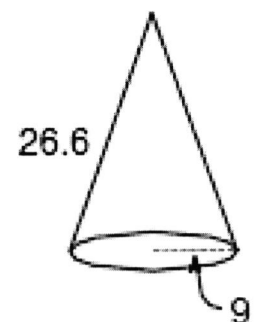
Base Circumference

Lateral Area

Surface Area

Volume

#6



Base Area:

Base Circumference

Lateral Area

Surface Area

Volume