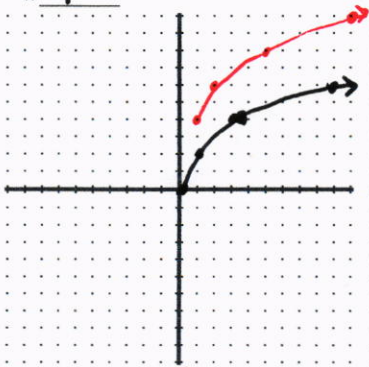
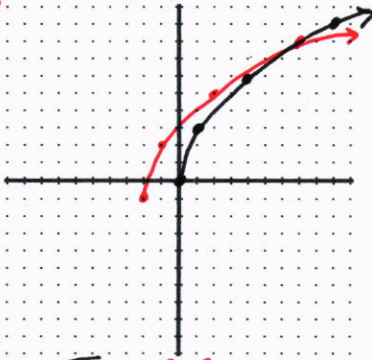


# 1



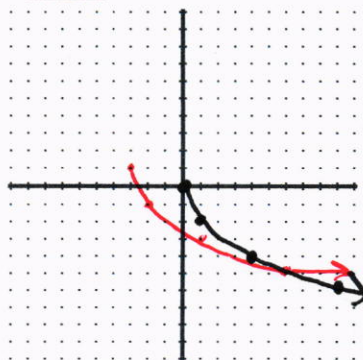
$y = 2\sqrt{x}$  Right 1  
up 4

# 2



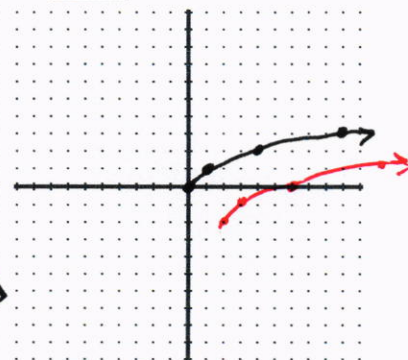
$y = 3\sqrt{x}$  Left 2  
down 1

# 3



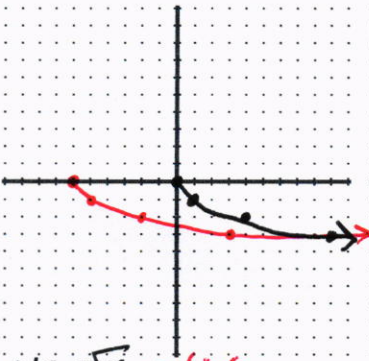
$y = -2\sqrt{x}$  Left 3  
up 1

# 4



$y = \sqrt{x}$  Right 2  
Down 2

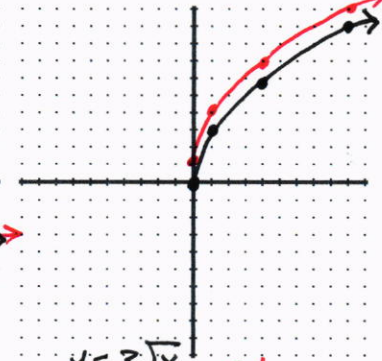
# 5



$y = -\sqrt{x}$  Left 6

# 9

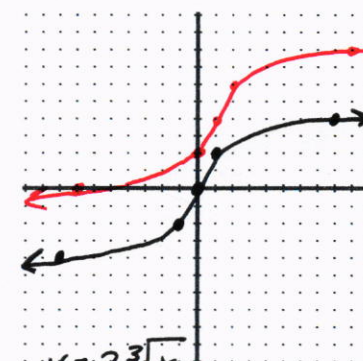
# 6



$y = 3\sqrt{x}$  up 1

# 10

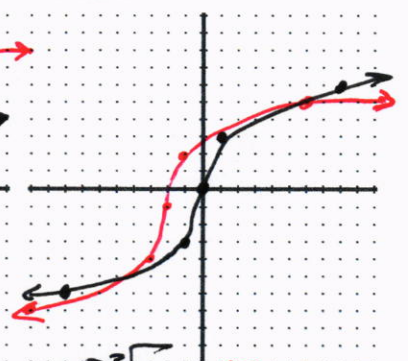
# 7



$y = 2\sqrt[3]{x}$  Right 1  
up 4

# 11

# 8




$y = 3\sqrt[3]{x}$  Left 2  
down 1

# 12



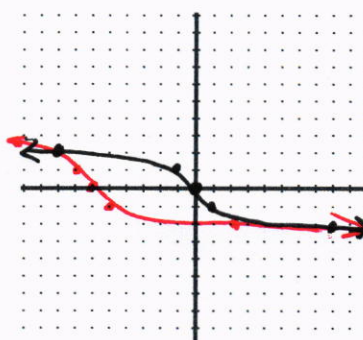
$y = -2\sqrt[3]{x}$  left 3 up 1

#



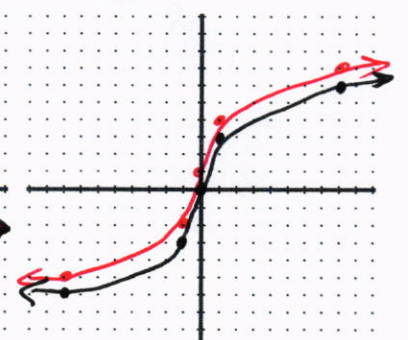
$y = \sqrt[3]{x}$  right 2  
down 5

#



$y = -\sqrt[3]{x}$  Left 6

#



$y = 3\sqrt[3]{x}$  up 1

#