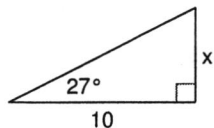


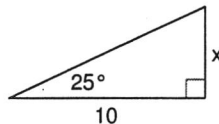
Using Trigonometry To Find Lengths

Find the missing side. Round to the nearest tenth.

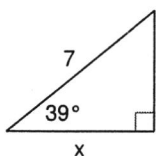
1)



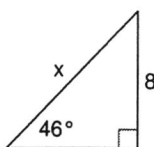
2)



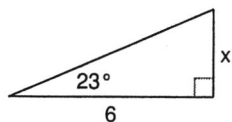
3)



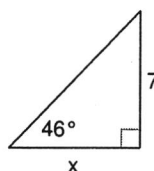
4)



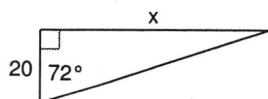
5)



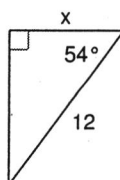
6)



7)



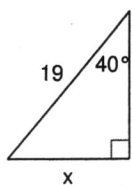
8)



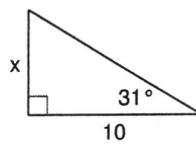
Soh Cah Toa

$$\sin = \frac{O}{H}$$
$$\cos = \frac{A}{H}$$
$$\tan = \frac{O}{A}$$

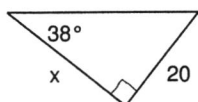
9)



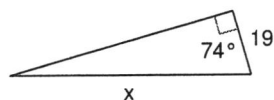
10)



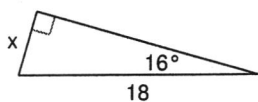
11)



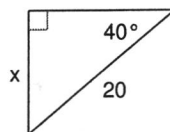
12)



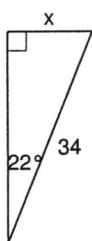
13)



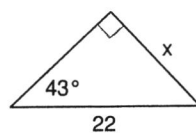
14)



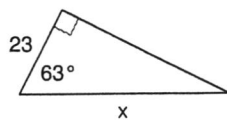
15)



16)



17)



18)

