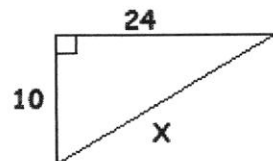


Geometry

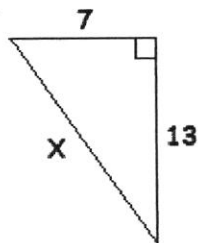
WS Pythagorean Thm Review

Find X. Round the the tenth if necessary.

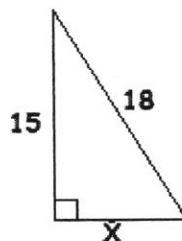
1.



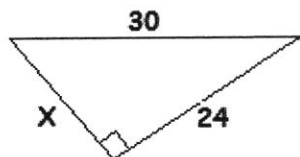
2.



3.

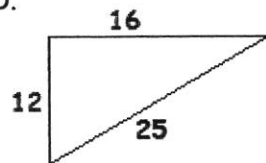


4.

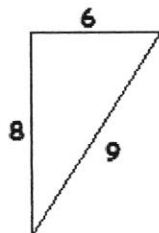


Use the Pythagorean Converse to decide if each triangle is ACUTE, OBTUSE or RIGHT

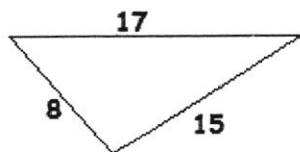
5.



6.



7.



8.

