

Use the figure at the right to complete each proportion.

1.  $\frac{a}{c} = \frac{\square}{f}$

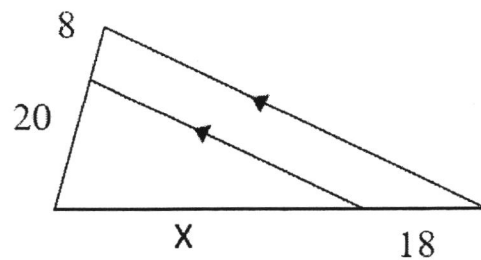
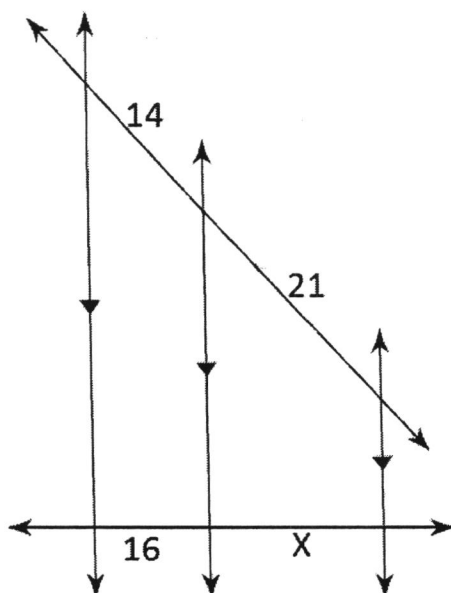
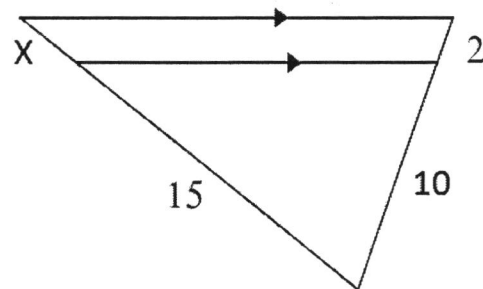
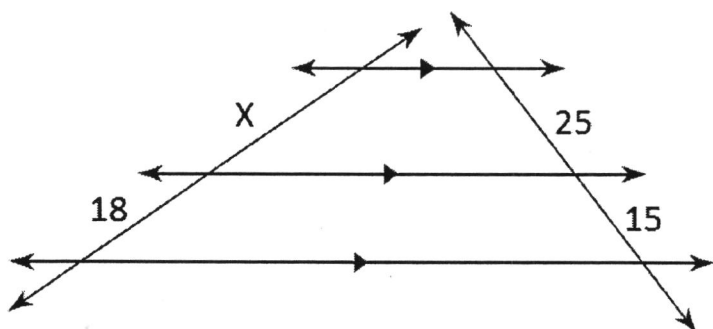
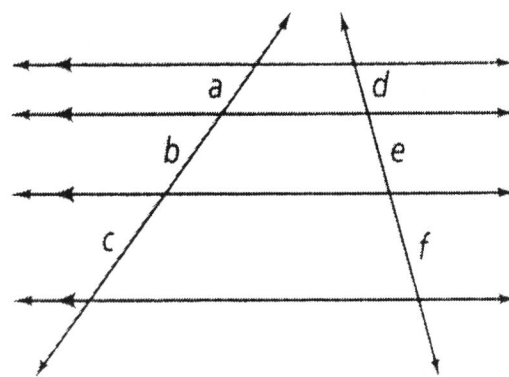
2.  $\frac{f}{e} = \frac{c}{\square}$

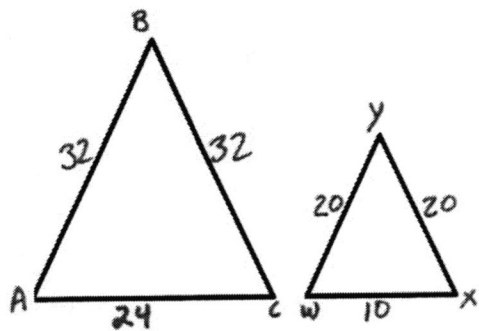
3.  $\frac{\square}{c} = \frac{e}{f}$

4.  $\frac{a}{\square} = \frac{b}{e}$

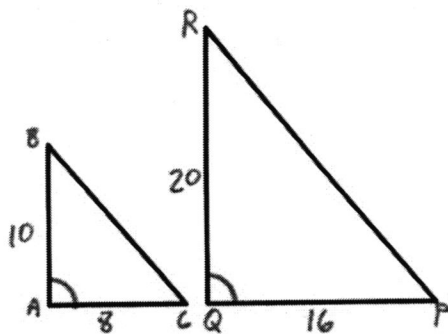
5.  $\frac{a}{b} = \frac{\square}{e}$

6.  $\frac{e}{\square} = \frac{f}{c}$

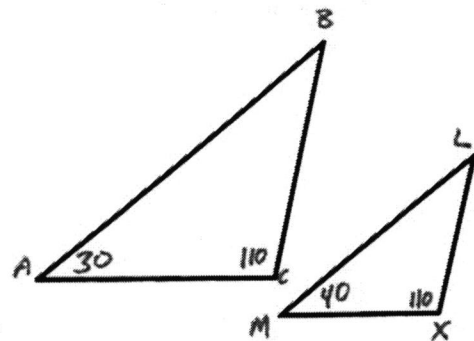




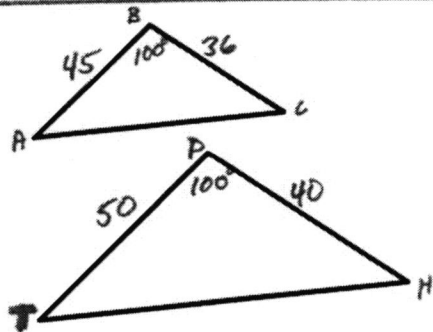
\_\_\_\_\_ ~ \_\_\_\_\_ by \_\_\_\_\_



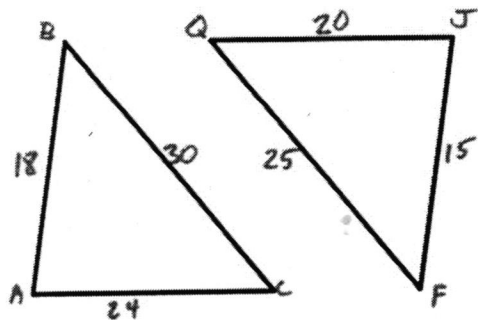
\_\_\_\_\_ ~ \_\_\_\_\_ by \_\_\_\_\_



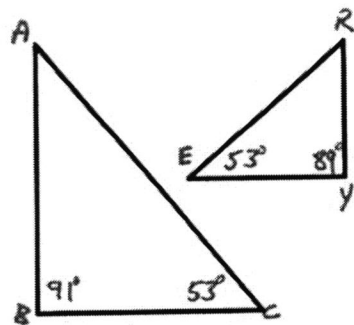
\_\_\_\_\_ ~ \_\_\_\_\_ by \_\_\_\_\_



\_\_\_\_\_ ~ \_\_\_\_\_ by \_\_\_\_\_



\_\_\_\_\_ ~ \_\_\_\_\_ by \_\_\_\_\_



\_\_\_\_\_ ~ \_\_\_\_\_ by \_\_\_\_\_