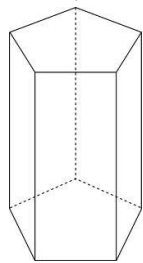


Solid identification. Name each of the following shapes. Ex the first is a "pentagonal prism".

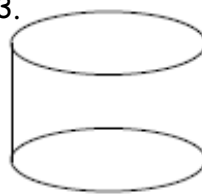
1.



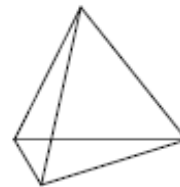
2.



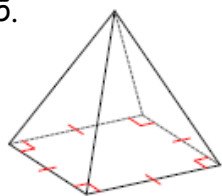
3.



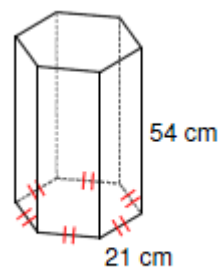
4.



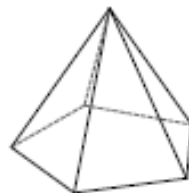
5.



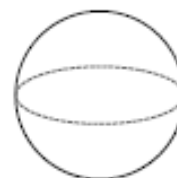
6.



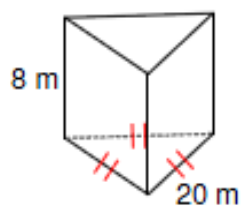
7.



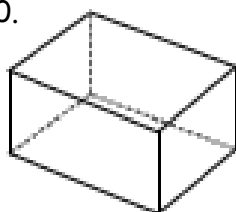
8.



9.



10.



11.



12.

